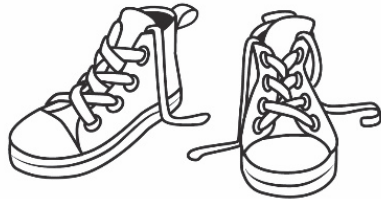


Master 109a

Repeated Addition Problems


Side A

There are 2 shoes in a pair.
How many shoes are in 4 pairs?



Side A

There are 3 wheels on a tricycle.
How many wheels are on 4 tricycles?



Side A

There are 4 wheels on a car.
How many wheels are on 3 cars?




Side A

A glove has 5 fingers.
How many fingers do 2 gloves have?



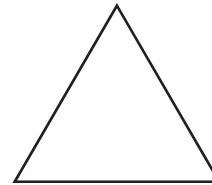
Side A

A guitar has 6 strings.
How many strings do 2 guitars have?



Side A

There are 3 sides on a triangle.
How many sides are on 3 triangles?



Side B

A star has 5 points.
How many points do 5 stars have?



Side B

A wolf has 2 ears.
How many ears do 7 wolves have?



Master 109b

Repeated Addition Problems

Side B

There are 4 leaves on a four-leaf clover.
How many leaves are on 6 four-leaf clovers?




Side B

A muffin tin holds 6 muffins.
How many muffins do 5 tins hold?



Side B

There are 7 days in a week.
How many days are in 4 weeks?



Side B

A scorpion has 8 legs.
How many legs do 3 scorpions have?



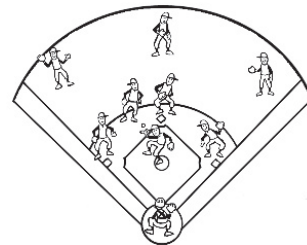
Side B

A stop sign has 8 sides.
How many sides do 2 stop signs have?



Side B

A baseball team has 9 players.
How many players do 3 teams have?



Side B

Wieners come in packages of 10.
How many wieners are in 3 packages?



Side B

Eggs come in cartons of 12.
How many eggs are in 2 cartons?

