


1  Match.

flowers

insects

birds



pond

rock

animal

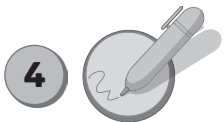

2



Now colour.



Listen, draw and colour.



Look and write.

1 There's a blue pond.

2 There are yellow flowers.

3 _____ a brown rock.

4 _____ a purple animal.

5 _____ pink insects.

6 _____ blue birds.

5



Write.

SONG



- 1 There are seven birds.
- 2 There _____ mushrooms.
- 3 There _____ rocks.
- 4 There _____ animals.

- 5 There _____ trees.
- 6 There _____ clouds.
- 7 There _____ pond.

6



Tell the class.

How many rocks
are there?


There are
five rocks.

7



Look, match and write.

SKILLS











- 1 The white horse
- 2 Two small birds
- 3 The flower and the mushroom

8



Listen and tick (✓).



9



Listen, write and say.

SOUNDS FUN!

Tr e e s, tr ____ s, tr ____ s.
 Gr ____ n, gr ____ n, tr ____ s.
 Thr ____ gr ____ n tr ____ s.


L ____ s ____ s.
 Thr ____ gr ____ n tr ____ s.

10



Look and correct the mistakes.

STORY



- 1 There are two mushrooms.
_____ There are three mushrooms.
- 2 There are two birds.

- 3 There's a flower.

- 4 There are insects.

- 5 There's a rock.

11



Look at the code and write the message.



H☆ll⚡, H⓪p ⓪nd H⚡p.

Hello, _____

a	=	🌕
e	=	★
i	=	🪐
o	=	⚡
u	=	🚀

12



Write a message for your friend in the code.

13



Draw and write.

1		+		= 6
2		-		= 4
3		+		= 7
4		-		= 2

- | | | | | |
|---|-----------------------|--|-------------|---------------|
| 1 | Four insects plus | | two insects | equals six. |
| 2 | Seven mushrooms minus | | | equals four. |
| 3 | Four clouds plus | | | equals seven. |
| 4 | Six flowers minus | | | equals two. |

14



Solve the riddle.

I'm the number of legs on five birds,



Plus the number of legs on two cats.



What number am I?




15



Complete the sums.

$11 + \underline{\quad} = 13$
 $20 - \underline{\quad} = 13$
 $12 + \underline{\quad} = 13$
 $18 - \underline{\quad} = 13$




16



Complete the crossword.

ROUND-UP



17



Look and write.

- 1 There's one _____ tree.
- 2 There are _____ rocks.
- 3 There _____ insects.
- 4 There _____ bird.
- 5 There _____ clouds.
- 6 There _____ mushrooms.
- 7 There _____ flowers.



18



Draw and colour your favourite park.

I CAN DO IT!



19



Write about your favourite park.

There's _____

There are _____

20



Now tell the class.

