


# Ladybird number bonds to 6


Draw dots on the ladybirds' wings to match the additions. Here is an example.




$$4 + 2 = 6$$



$$1 + 5 = 6$$



$$2 + 4 = 6$$



$$3 + 3 = 6$$