

Master 113a

Division Problems

Equal-Grouping Problems

<p>Priya has 12 ride tickets. Each ride is 3 tickets. How many rides can Priya go on?</p>	<p>Ben has 10 scoops of ice cream. He puts 2 scoops on a cone. How many ice cream cones can he make?</p>
<p>Mother robin brought 8 worms to the nest to feed her babies. Each baby gets 2 worms. How many babies can she feed?</p>	<p>Twelve children are in line for the Ferris wheel. Each car holds 4 children. How many cars do they need?</p>



Equal-Sharing Problems


<p>At summer camp, 9 girl campers need to share 3 tents equally. How many girls will be in each tent?</p>	<p>Ben has 10 strawberries to share equally among 5 fruit smoothies. How many strawberries can he put in each?</p>
<p>12 students want to divide themselves into 4 equal teams to play a game. How many students will be on each team?</p>	<p>Felix has 6 toy cars to share equally among 3 loot bags. How many toy cars will be in each bag?</p>





Master 113b

Division Problems (Accommodation)

Equal-Grouping Problems



Equal-Sharing Problems



Master 113c

Division Problems (Combined Grades Extension)

Equal-Grouping Problems

<p>Nathan has 45 building blocks. He wants to build towers with 9 cubes in each. How many towers can Nathan build?</p>	<p>Luca has 72 pieces of pepperoni. He wants to put 9 pieces on each small pizza. How many pizzas can Luca make?</p>
<p>Mia raised \$56 selling face masks for her school. Each mask sold for \$7. How many masks did she sell?</p>	<p>There are 48 students waiting to go on the roller coaster. Each car holds 6 students. How many cars will they fill?</p>



Equal-Sharing Problems

<p>Camilla wants to share 50 apples equally among the 10 horses in the stable. How many apples should each horse get?</p>	<p>Five students are to take equal turns playing a video game. They have 45 minutes altogether. How long is each student's turn?</p>
<p>There are 54 chairs. They are to be divided equally among 9 tables. How many chairs will be at each table?</p>	<p>Jonah has collected 32 toys from kids' meals. He wants to display them equally on 4 shelves. How many toys will be on each shelf?</p>

